

Name: _____

Rosie's Bedtime Story

By Anita Amin



Rosie loved bedtime.

Her dad always told her stories. Sometimes, he told fairy tales. Sometimes, he told animal stories. And sometimes, he told sports stories.

Rosie couldn't wait to hear Dad's next story.

But that night, Mom tucked Rosie into bed instead. "Dad is sick," Mom told Rosie. "But I can tell you a story if you want me to." So Mom told Rosie a story.

But to Rosie, it wasn't the same. She felt sad. She didn't want Dad to be sick, and she missed story time with Dad.

She thought maybe Dad missed story time, too. This gave her an idea.

Rosie hopped out of bed. She went to Dad's room. She knocked on his door. "Come in," Dad said.

When Rosie opened the door, Dad smiled weakly. "I'm sorry. I'm going to miss story time tonight."

Rosie sat on Dad's bed. "No you won't. I'm going to tell you a story." So Rosie told Dad a story about a castle, a dragon, and a princess. Dad loved the story and he fell asleep with a smile on his face.

"Get well quickly, Dad," Rosie whispered.

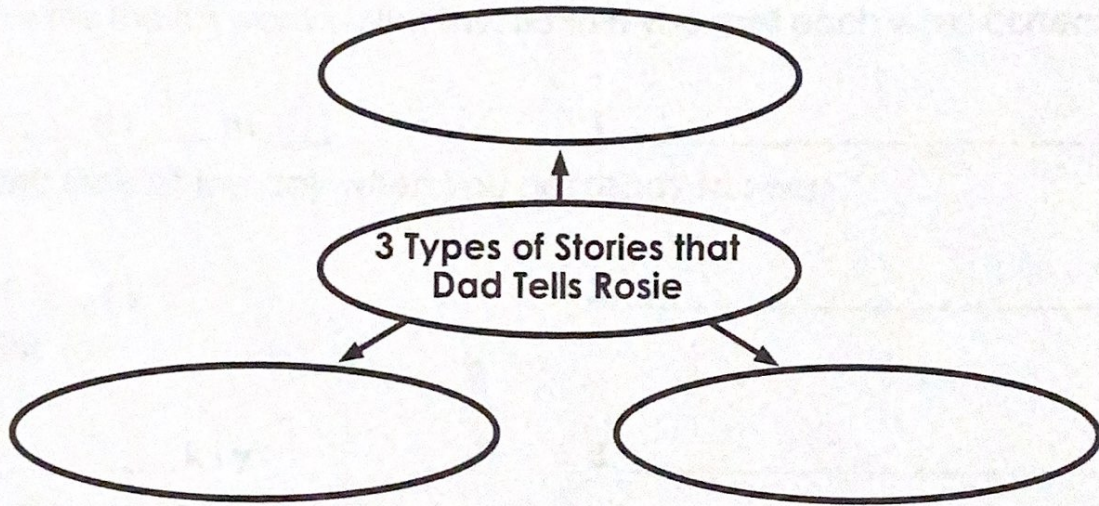
Name: _____

Rosie's Bedtime Story

By Anifa Amin



1. Complete the graphic organizer.



2. Why didn't Rosie's dad tuck her into bed?

3. What type of story did Rosie tell her dad?

a. a true story

b. a scary story

c. a story about animals

d. a fairy tale

4. Where does the beginning of the story take place?

a. in Rosie's bedroom

b. in Rosie's dad's bedroom

c. in the living room

d. in the kitchen

5. Who fell asleep at the end of the story? _____

Name: _____

Rosie's Bedtime Story

By Anita Amin



Fill in the missing vowels to create words from the story.
Then write the full word on the line. Be sure you spell each word correctly.

1. b ___ d t ___ m ___

1. _____

hint: time of the day when you get ready to sleep

2. s t ___ r y

2. _____

hint: tale

3. w ___ ___ k l y

3. _____

hint: opposite of strongly

4. k n ___ c k ___ d

4. _____

hint: hit something to make a sound

5. w h ___ s p ___ r ___ d

5. _____

hint: spoke softly

6. c ___ s t l ___

6. _____

hint: large house made of stone

7. p r ___ n c ___ s s


7. _____

hint: daughter of a king or queen

Name: _____

The Big Egg

By Suzanne Francis



Sam lived on a farm and had a job to do. He had to wake up early every day to feed the chickens and get their eggs.

One morning Sam went outside to do his job. He reached down and got three eggs from the first chicken. He reached down and got two eggs from the second chicken. He reached down and felt a huge egg under the third chicken.

He could not believe it. The egg felt strange. It was much bigger and heavier than the others. He looked at it with surprise.

Sam smiled and said, "So *that's* where my baseball went!"

1. What two things did Sam have to do each morning?

2. How many eggs did Sam collect before he found the "strange egg"?

3. What funny thing happened in this story?

Name: _____

Main Idea

Read each paragraph and choose the main idea.

I have a dog named Boots. I taught him lots of tricks. When I tell him to, Boots will sit or lie down. He can also wave his paw to greet people. When I say, "Dance, Boots.", he will stand up on two legs and walk. I don't know of many dogs that can do such amazing tricks.

The main idea of this paragraph is:

- a. Boots is my dog.
- b. Boots can sit.
- c. Boots is very smart.
- d. Most dogs can't dance.

Yesterday was my birthday. When I woke up, I noticed my brother Todd hung up a big sign that said, "Happy Birthday, Joey!" Mom made spaghetti for dinner. It's my favorite food in the whole world. My friend Dave came over and handed me a wrapped gift. I wondered what it was. It was a new basketball! I had a great day.

The main idea of this paragraph is:

- a. Todd had a great birthday.
- b. Joey had a great birthday.
- c. Todd got lots of gifts.
- d. Joey got lots of gifts.

Peter's parents bought a new carpet for the living room. Now, he has to take his shoes off when he enters the house. He's also not allowed to eat or drink in the living room any more. Peter's furry dog isn't allowed to play ball in there either. When his parents got the new carpet, there were lots of new rules.

The main idea of this paragraph is:

- a. Peter cannot go in the living room.
- b. Peter's parents don't like the carpet.
- c. Peter likes to make a mess.
- d. Peter's parents made new rules so the new carpet stays clean.

Name: _____

The Spider Web

By Anita Amin

Nina raced her brother Carlos down the sidewalk. "I'm going to win!" Nina laughed, peeking back at him.

Then Nina ran right into a spider web. She jumped around, screaming. "Is it on me? Get it off of me! Get the spider off of me!"

Nina slapped her hair. She pulled off the sticky web. "Where's the spider?" Nina cried.

Nina swiped at her face and arms. "I think it's crawling all over me. It must be huge! Do you see it?" She asked Carlos. "Do you see the spider?"

Carlos smiled. He pointed to the sidewalk. "There's your spider," he said.

They watched a baby spider hurry away.

"And guess what." Carlos laughed. He dashed past the finish line. "I won!"



Name: _____

The Spider Web

By Anita Amin



1. Who are the main characters in this story?

_____ and _____

2. How does Nina feel when she runs into the web?

- a. tired
- b. hurt
- c. sad
- d. scared

3. When Nina runs into the web, how does it feel?

- a. soft
- b. furry
- c. sticky
- d. hard

4. Look at the picture below.



Is this a picture of the **beginning** of the story or the **end** of the story?

How can you tell?

Name: _____

The Spider Web

By Anita Amin

Draw lines to match the words from the story with their meanings.



- | | |
|----------------|----------------------|
| 1. dashed • | • looking |
| 2. screaming • | • animal with 8 legs |
| 3. spider • | • yelling |
| 4. peeking • | • ran |

Use a word from the box to complete each sentence.

spider	screaming	dashed	peeking
--------	-----------	--------	---------

5. Sam _____ across the playground.
6. There is a gray _____ climbing on the wall.
7. A kitten was _____ at me from a hole in the fence.
8. My baby brother was _____ loudly because he was hungry.

Name: _____

Breakfast Surprise

By Guy Belleranti




Chipmunk woke up. She was hungry.

Chipmunk ran to the garden. Oh no! The carrots were gone. Rabbit ate them all for breakfast, she thought.

Chipmunk ran to the berry bushes. Oh no! The berries were gone, Bear ate them all for breakfast, she thought.

Chipmunk ran to the trees. Oh no! The nuts on the trees were gone. Bird ate them all for breakfast, she thought.

What could she eat for breakfast?



Suddenly she heard voices calling. "Over here, Chipmunk. By the river."

Chipmunk ran to the river. She saw four piles of carrots, berries and nuts.

"Surprise!" cried Rabbit, Bear and Bird. "We made breakfast for all of us."

"Thank you," Chipmunk said. "Let's eat!"

Name: _____

Breakfast Surprise

By Guy Belleranti



1. When does this story take place?
 - a. before bedtime
 - b. after dinner
 - c. in the morning
 - d. in the winter
2. Where does this story take place?
 - a. in a city
 - b. in a forest
 - c. in the sea
 - d. in a cold place

3. Use the words in the box to complete the sentences.

berries	nuts	carrots
---------	------	---------

First, Chipmunk looked for _____.

Next, Chipmunk looked for _____.

Then Chipmunk looked for _____.

4. Chipmunk heard voices calling.
They said **"Over here, Chipmunk, by the river."**

Whose voices did Chipmunk hear?

Name: _____

Breakfast Surprise

By Guy Belleranti



Draw lines to match the words from the story with their meanings.

- | | |
|----------------|-----------------------------------|
| 1. carrots ● | ● bunny; hare |
| 2. berries ● | ● fruits in a hard shell |
| 3. nuts ● | ● fruits that are small and juicy |
| 4. hungry ● | ● first meal of the day |
| 5. breakfast ● | ● long, orange vegetables |
| 6. rabbit ● | ● wanting to eat |

Name: _____




Math Buzz

Add.

	Tens	Ones
	3	1
+		7
<hr/>		

Circle the value of the underlined digit.

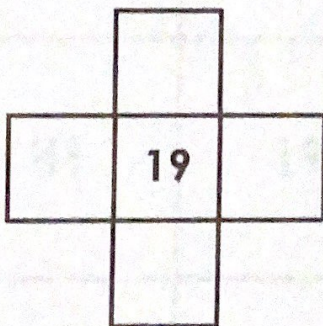
62



60

6

Write the numbers that are 1 more, 1 less, 10 more, and 10 less.




Find the total value of the coins.




answer: _____ ¢

Write the number of sides and corners for each shape.




_____ sides

_____ corners



_____ sides

_____ corners



_____ sides

_____ corners

Name: _____



Math Buzz

Complete the table.

Number of Triangles	1	2	3	4	5
Number of Sides	3	6			

Color the numbers that have a 1 in the tens place.

18	31	16
41	19	51
13	17	21

Solve.

Add 9 and 9. _____

Find the sum of 12 and 8. _____

Circle the number sentence that is true.

$$6 + 6 = 3 + 9$$

$$9 + 5 = 7 + 8$$


Count by ones.

34, 35, 36, _____, _____, _____, _____, _____, _____

Name: _____

The Early Bird Catches the Worm (Maybe)

By S. V. Richard



1. Why is Will afraid of Bud?

- a. Will thinks Bud is going to eat his food.
- b. Will thinks Bud is going to eat him.
- c. Will and Bud like to play.

2. Put these sentences in order. Write 1, 2, and 3 on the lines.

_____ Will hides in the grass.

_____ Will hides in an apple.

_____ Bud wakes up early.

3. What does Bud eat in this story? _____

4. Which sentence is true?


- a. Will can fly.
- b. Will is hungry.
- c. Bud does not eat Will.

Now try this: On a sheet of paper, make a list of seven places Will could hide from Bud.

Name: _____

The Early Bird Catches the Worm (Maybe)

By S. V. Richard



Bud is a bird. He wakes up early to catch a worm. Bud is very hungry.

Will is a worm. He moves around in the dirt. Will sees Bud flying in the sky.

Bud is looking for food.

"I must hide," says Will. Will moves to the grass.

He still sees Bud flying in the sky. "I am not safe here. I must hide somewhere else."

Will moves near a tree. He hides in the shade. Bud flies around the tree. "The shade does not hide me!"

Will moves to the garden. He still sees Bud flying in the sky. "I must find some place safe to hide," Will says.

Will looks around and disappears as Bud swoops down. Bud eats some bird seeds that he finds on the ground.

Bud did not see Will.

Bud flies away as Will pokes his head out of an apple that fell from the tree!

Will smiles and says, "That was close!"

Name: _____

Subtraction

Subtract to find the differences.



a.
$$\begin{array}{r} 49 \\ - 17 \\ \hline \end{array}$$

b.
$$\begin{array}{r} 53 \\ - 22 \\ \hline \end{array}$$

c.
$$\begin{array}{r} 67 \\ - 22 \\ \hline \end{array}$$

d.
$$\begin{array}{r} 18 \\ - 5 \\ \hline \end{array}$$

e.
$$\begin{array}{r} 71 \\ - 10 \\ \hline \end{array}$$

f.
$$\begin{array}{r} 98 \\ - 4 \\ \hline \end{array}$$

g.
$$\begin{array}{r} 80 \\ - 10 \\ \hline \end{array}$$

h.
$$\begin{array}{r} 45 \\ - 12 \\ \hline \end{array}$$

i.
$$\begin{array}{r} 99 \\ - 9 \\ \hline \end{array}$$

j.
$$\begin{array}{r} 64 \\ - 22 \\ \hline \end{array}$$

k. There are 56 cars for sale.
People buy 22 of them.
How many cars are left?

l. There are 49 cars in the parking lot.
6 drive away. How many cars are left?



Name: _____



Math Buzz

Estimate. About how many cubes long is the piece of chalk?



answer: _____ cubes

There were 24 children on the bus. 5 more got on at the next stop. How many children are on the bus now?

?	
24	5


_____ + _____ = _____

answer: _____ children

Count back by ones.

56, 55, 54, _____, _____, _____, _____, _____, _____

Complete the number bonds.



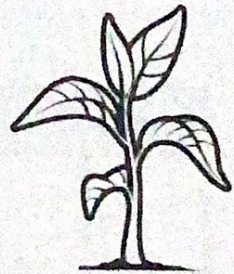
Circle the word that makes the sentence true.



Pax



Zoe



Isla

Isla's plant is **taller** / **shorter** than Pax's plant.

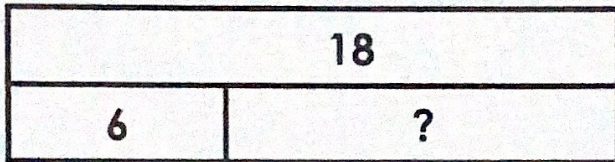
Zoe's plant is the **tallest** / **shortest**.



Name: _____

Math Buzz

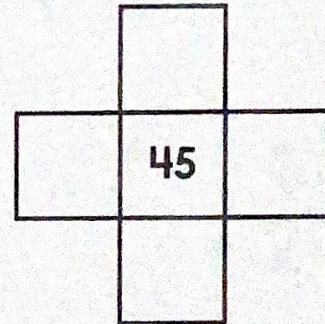
Mrs. Daly had 18 markers. She gave 6 markers to the first group. How many markers does she have now?



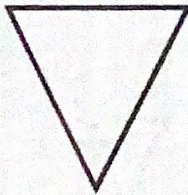
_____ - _____ = _____

answer: _____ markers

Write the numbers that are 1 more, 1 less, 10 more, and 10 less.

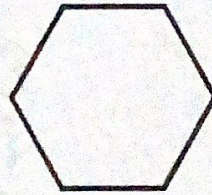


Write the number of sides and corners for each shape.



_____ sides

_____ corners



_____ sides

_____ corners

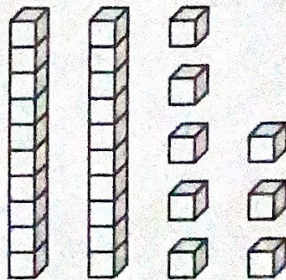


_____ sides

_____ corners

Circle the value of the underlined digit.

28



80

8

Add.

	Tens	Ones
	5	9
+		4

Name _____

Date _____



Jumping Math!

Jump through these math problems! Add the numbers.

1.
$$\begin{array}{r} 3 \\ +5 \\ \hline \end{array}$$

2.
$$\begin{array}{r} 1 \\ +7 \\ \hline \end{array}$$

3.
$$\begin{array}{r} 1 \\ +6 \\ \hline \end{array}$$

4.
$$\begin{array}{r} 1 \\ +2 \\ \hline \end{array}$$

5.
$$\begin{array}{r} 2 \\ +7 \\ \hline \end{array}$$

6.
$$\begin{array}{r} 3 \\ +1 \\ \hline \end{array}$$

7.
$$\begin{array}{r} 6 \\ +3 \\ \hline \end{array}$$

8.
$$\begin{array}{r} 4 \\ +3 \\ \hline \end{array}$$

9.
$$\begin{array}{r} 5 \\ +2 \\ \hline \end{array}$$

10.
$$\begin{array}{r} 3 \\ +6 \\ \hline \end{array}$$

11.
$$\begin{array}{r} 3 \\ +2 \\ \hline \end{array}$$

12.
$$\begin{array}{r} 2 \\ +3 \\ \hline \end{array}$$



Missing Numbers

Fill in the missing numbers in the chart.

1		3	4	5	6		8	9	10
11		13	14		16	17	18		20
21	22		24	25	26		28	29	30
31	32	33	34	35	36	37	38	39	
	42		44		46	47	48	49	50
51	52	53	54	55	56	57		59	60
61		63		65		67	68	69	
71	72		74	75	76		78	79	80
	82	83	84		86	87	88	89	90
91	92		94	95		97	98		100



Name: _____

2-Digit Addition without Regrouping

Addition

Find the sums.

a.
$$\begin{array}{r} 32 \\ + 15 \\ \hline \end{array}$$

b.
$$\begin{array}{r} 44 \\ + 34 \\ \hline \end{array}$$



c.
$$\begin{array}{r} 41 \\ + 10 \\ \hline \end{array}$$

d.
$$\begin{array}{r} 20 \\ + 29 \\ \hline \end{array}$$

e.
$$\begin{array}{r} 62 \\ + 6 \\ \hline \end{array}$$

f.
$$\begin{array}{r} 72 \\ + 26 \\ \hline \end{array}$$

g.
$$\begin{array}{r} 34 \\ + 23 \\ \hline \end{array}$$

h.
$$\begin{array}{r} 5 \\ + 61 \\ \hline \end{array}$$

i.
$$\begin{array}{r} 54 \\ + 20 \\ \hline \end{array}$$

j.
$$\begin{array}{r} 83 \\ + 16 \\ \hline \end{array}$$

- k. Diego has 25 toy cars.
Sara has 13 toy cars.
How many toy cars do they have altogether? _____

- l. Sara has 34 dolls.
Diego gives her 3 more.
How many dolls does she have in all? _____

Name: _____

Basic Addition

$$\begin{array}{r} 9 \\ + 8 \\ \hline \end{array}$$

$$\begin{array}{r} 8 \\ + 7 \\ \hline \end{array}$$

$$\begin{array}{r} 7 \\ + 10 \\ \hline \end{array}$$

$$\begin{array}{r} 3 \\ + 6 \\ \hline \end{array}$$

$$\begin{array}{r} 9 \\ + 10 \\ \hline \end{array}$$

$$\begin{array}{r} 2 \\ + 2 \\ \hline \end{array}$$

$$\begin{array}{r} 8 \\ + 5 \\ \hline \end{array}$$

$$\begin{array}{r} 6 \\ + 9 \\ \hline \end{array}$$

$$\begin{array}{r} 10 \\ + 8 \\ \hline \end{array}$$

$$\begin{array}{r} 9 \\ + 2 \\ \hline \end{array}$$

$$\begin{array}{r} 8 \\ + 9 \\ \hline \end{array}$$

$$\begin{array}{r} 10 \\ + 10 \\ \hline \end{array}$$

$$\begin{array}{r} 5 \\ + 5 \\ \hline \end{array}$$

$$\begin{array}{r} 2 \\ + 7 \\ \hline \end{array}$$

$$\begin{array}{r} 2 \\ + 6 \\ \hline \end{array}$$

$$\begin{array}{r} 5 \\ + 8 \\ \hline \end{array}$$

$$\begin{array}{r} 7 \\ + 3 \\ \hline \end{array}$$

$$\begin{array}{r} 3 \\ + 5 \\ \hline \end{array}$$

$$\begin{array}{r} 6 \\ + 10 \\ \hline \end{array}$$

$$\begin{array}{r} 9 \\ + 6 \\ \hline \end{array}$$

$$\begin{array}{r} 6 \\ + 6 \\ \hline \end{array}$$

$$\begin{array}{r} 3 \\ + 10 \\ \hline \end{array}$$

$$\begin{array}{r} 2 \\ + 4 \\ \hline \end{array}$$

$$\begin{array}{r} 10 \\ + 5 \\ \hline \end{array}$$

$$\begin{array}{r} 10 \\ + 3 \\ \hline \end{array}$$

Time: _____ minutes

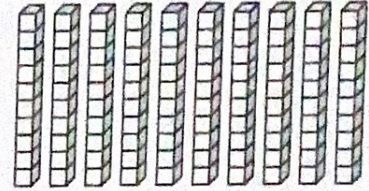
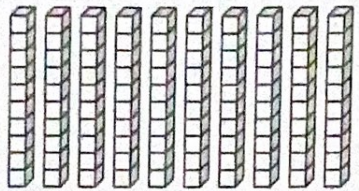
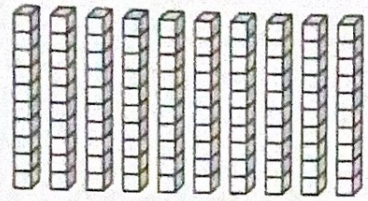
Score: _____ out of 25



Name: _____

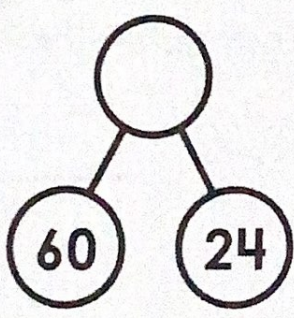
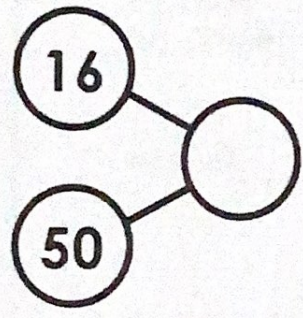
Math Buzz

Circle groups of 10.



_____ tens = _____ hundreds

Complete the number bonds.



Match the numbers that have the same value.

9 tens 7 ones

78 ones

7 tens 8 ones

89 ones




8 tens 9 ones

97 ones



Fill in the times Levi started each activity.

had a snack

played outside



Draw a line to divide each shape into 2 equal parts.



What did Levi do at 3:00? _____